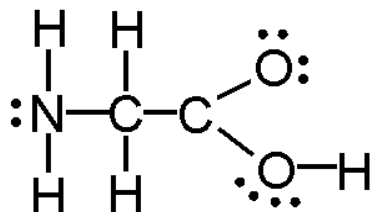


MSC 1012 questions for Chapter 14 set 2

Functional Groups:

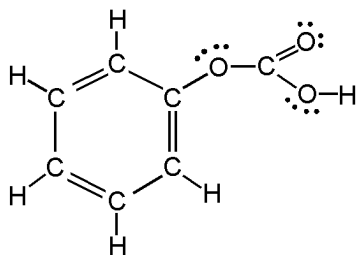
NAME \_\_\_\_\_

Circle and name (identify) these groups if they exist in the following compounds: alcohol groups, carboxylic acid groups, amines, amides, esters, aldehydes, ketones. Identify whether the compound is aromatic.::



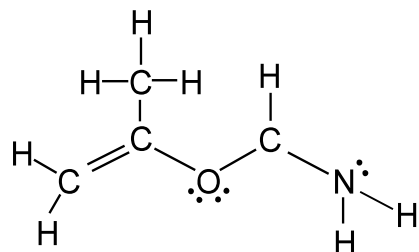
Groups: \_\_\_\_\_

Aromatic? If so where?



Groups: \_\_\_\_\_

Aromatic? If so where?



Groups: \_\_\_\_\_

Aromatic? If so where?