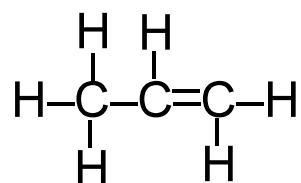


MSC 1012 questions for Chapter 14 set 3

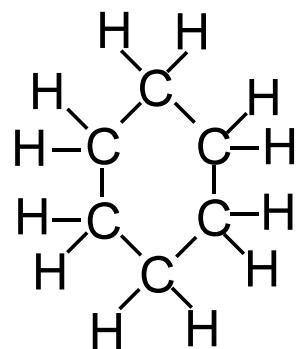
Hydrocarbon Types:

NAME _____

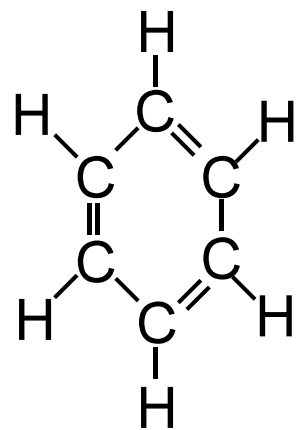
Identify if each of the following is an alkane, alkene, alkyne, cycloalkane, or aromatic compound.



It is: _____



It is: _____



It is: _____