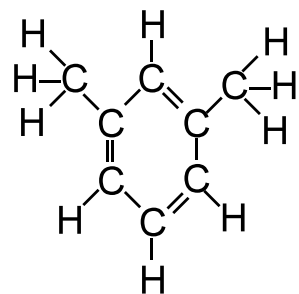


MSC 1012 questions for Chapter 14 set 4

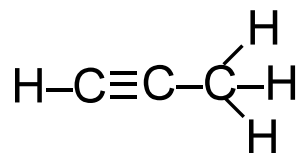
Hydrocarbon Types:

NAME \_\_\_\_\_

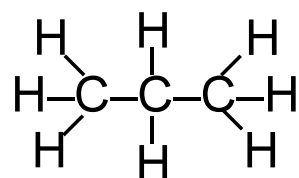
Identify if each of the following is an alkane, alkene, alkyne, cycloalkane, or aromatic compound.



It is: \_\_\_\_\_



It is: \_\_\_\_\_



It is: \_\_\_\_\_